

Sub competencies marks

HALF YEARLY EXAMINATION - 2019-20

CLASS - IV
SUBJECT : EVS (WITH ANSWER)

Time : 2 : 30 Hrs.

M.M. 80

Name.....Class & Sec.....Roll No.....

Date.....Sign. of Invigilator.....Sign. of Examiner.....

GRADE SHEET

COMPETENCIES	OBSERVATION & REPORTING	IDENTIFICATION & CLASSIFICATION	DISCOVERING OF FACTS	TOTAL
V.P.	(25)	(25)	(30)	80
V.P. OBTAINED				


OBSERVATION AND REPORTING

V.S.A.

(6x1=6)

Q.1 (A) Observe the pictures given below and write their name .

(1)




Vallam

(2)



Coolie

(3)




Madhubani
Paintings

(4)




Bullock-Cart (P.T.O.)

(5)



Camel Cart

(6)



Karnam Maleshwari

B. Match the following :

(4x1 = 4)

COLUMN - A



COLUMN B

(i) Multi Storey Buildings

(ii) Lotus flower

(iii) Bee hive

(iv) Ferry



S.A.

(2x5 = 10)

Q.2 (i) Name any two neighbouring countries of India.

Ans. (a) Bhutan (b) Nepal

(3)

(ii) Write two sources of water.

Ans. (a) Rain (b) River

(iii) Match the following :

COLUMN - A

COLUMN - B

Madgaon	—————	Hindi
Uttar Pradesh	—————	Goa
Tamil Nadu	—————	Ammumma
Mother's mother	—————	Tamil

(iv) What kind of special food is cooked in weddings.

Ans. (a) Sahi paneer (b) Poori

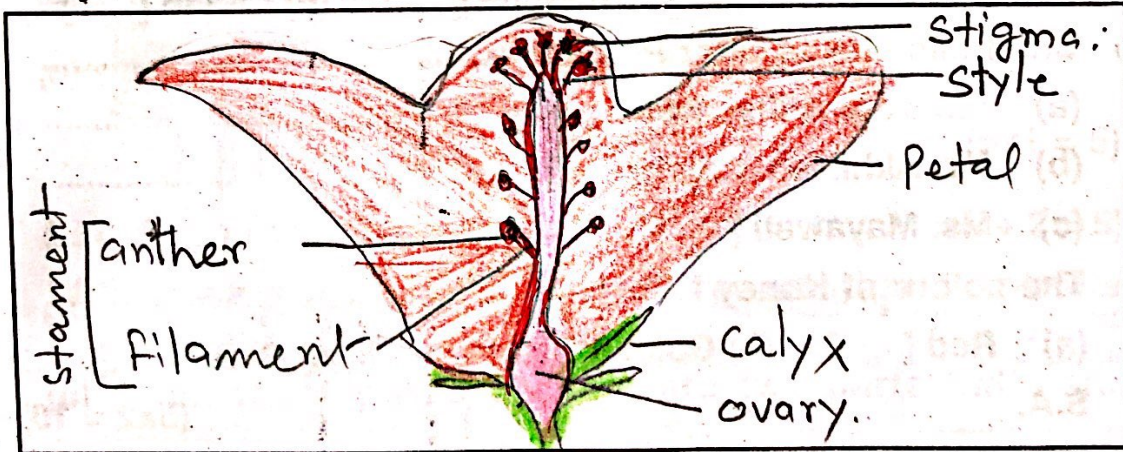
(v) Write name of two things which dissolve in water.

Ans. (a) Salt (b) Sugar

L.A.

(3+2 = 5)

Q.3 Draw and colour Hibiscus flower and label its parts. Write any two uses of flowers. (5)



Uses of flowers :

Ans. - for making Colours
 - To make scents

(P.T.O.)

IDENTIFICATION AND CLASSIFICATION

VSA

(10x1 = 10)

Q.4 Put a tick (✓) mark on right answer –

- (i) A person who works with wood is –
(a) Carpenter [✓] (b) Mason [] (c) Electrician []
- (ii) Honey bee that lays eggs is –
(a) Drone [] (b) Worker [] (c) Queen bee [✓]
- (iii) Three months old baby elephant may weight about –
(a) 200 kgs [✓] (b) 100 kgs [✗] (c) 50 kgs []
- (iv) The tree that is found in desert –
(a) Peepal tree [] (b) Khejadi tree [✓] (c) Banyan tree []
- (v) Animal that live in herd is –
(a) Cow [] (b) Deer [✓] (c) Camel []
- (vi) An animal with ears like fan is –
(a) Dog [] (b) Elephant [✓] (c) Goat []
- (vii) Kanpur is situated on the bank of river –
(a) Ganga [✓] (b) Gomti [] (c) Yamuna []
- (viii) The Kannauj district in Uttar Pradesh is famous for :-
(a) Itr [✓] (b) Petha [] (c) Ladoo []
- (ix) Chief Minister of Uttar Pradesh is –
(a) Mr. Yogi Aditya Nath [✓]
(b) Mr. Akhilesh Yadav []
(c) Ms. Mayawati []
- (x) The colour of Honey is –
(a) Red [] (b) Golden Brown [✓] (c) Green []

S.A.

(5x2 = 10)

Q.5 (i) Classify the following as per table –

Aeroplane, Ship, Ferry, Helicopter

Means of air Transport

Aeroplane
.....
Helicopter
.....

Means of water Transport

Ship
.....
Ferry
.....

(ii) Classify these animals as per given table :-

Ants, Cow, Sparrow, Bat.

The animals that lay eggs

The animals that give birth to babies

- 1. ANTS
- 2. Sparrow

- 1. Bat
- 2. Cow.

(iii) What do you call them ?

- (a) Your mother's sister
- (b) Your mother's mother
- (c) Your father's sister
- (d) Your father's mother

- Mausii
- Nani
- Bua.
- Dadi

(iv) Write name of 2 outdoor and 2 indoor games :-

Outdoor games

Indoor games

- Cricket
- Football.

- Chess.
- Table Tennis

(v) Write material used in making cement bridge and bamboo bridge.

Cement bridge

Bamboo bridge

- Cement
- Iron rod.
- Sand.

- Bamboo
- rope
- Wire

L.A.

Khejadi

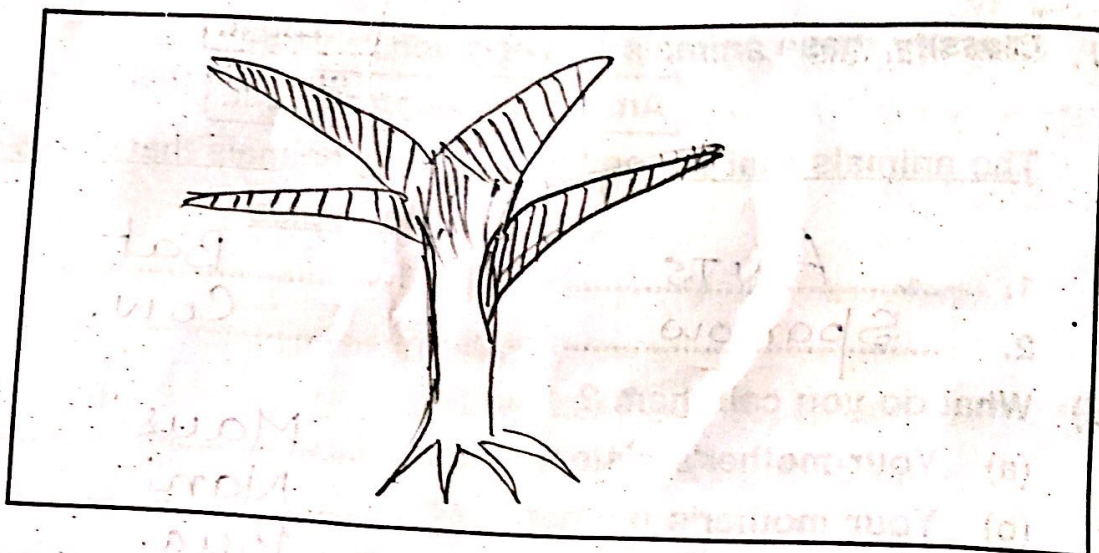
(3 + 2 = 5)

Q.6 Write five sentences about khejadi tree and draw its picture.

Ans. Khejadi tree is found mainly in desert areas.

- It can grow without much water.
- Its bark is used for making medicines.
- People cook and eat its fruits (beans)
- Its wood is such that it will not be affected by insects.

(P.T.O.)



DISCOVERY OF FACTS

VSA

(5x1 = 5)

Q.7 Write 'T' for true and 'F' for false statement :-

- (a) Bamboo bridge is stronger than cement bridge. [F]
- (b) Virat Kohli is the captain of cricket team of India. [T]
- (c) Most of the bees in the hive are worker-bees. [T]
- (d) It is not safe to boil water before drinking. [F]
- (e) Anita made honey from litchi flowers. [T]

Q.8 Fill in the blank :-

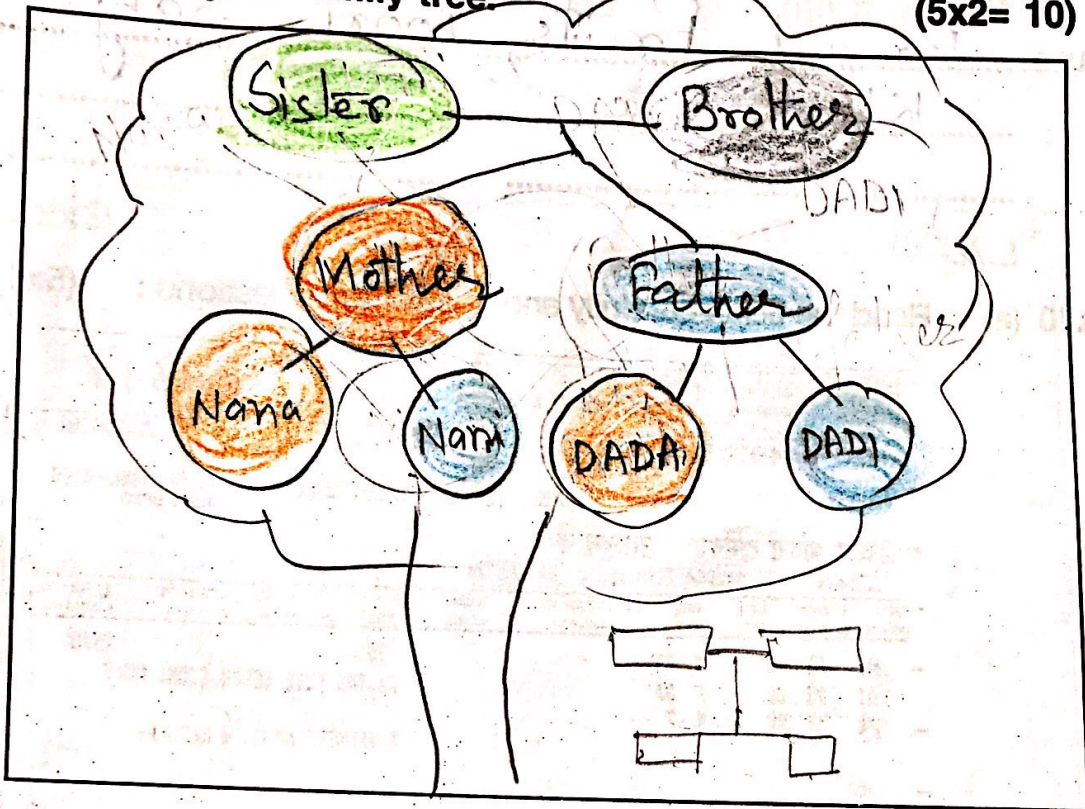
(5x1 = 5)

- (a) When river reaches in cities its water becomes... dirty ..
- (b) Number of players in one team of kabaddi is Seven
- (c) Our country was divided into two parts India and Pakistan in 1947
- (d) The valley of flowers is located in Uttaranchal
- (e) Elephants feel Sad when they are kept in chain.

S.A.

Q.9 (i) Draw your family tree

(5x2= 10)



(ii) What materials have been used in making your house.

Ans. Cement, bricks, Sand, Iron rod, Wood, Glass etc.

(iii) Write the name of flowers which are used to make scent.

Ans. (1) Rose
(2) Jasmine.

(iv) There can be many reasons for changes in families. Write any two reasons ?

Ans. (1) A new baby is born, one family member increases.
(2) A death of a family member (P.T.O.)

(v) What food would you like to take with you when you travel ?
Why ?

Ans. Bread, Fruits, Poori, Sabji
Kheer etc

L.A. (5x2 = 10)

Q.10 (a) Read the ticket carefully and answer the questions : (5x1 = 5)

PNR NO.		TRAIN NO.		DATE		CLASS		JOURNEY CLASS		68250918	
820-6449755		9037		24-12-2006		643		2		1	
CLASS		JOURNEY CLASS		RESV. UPTO		768250918		RESV. UPTO		RESV. UPTO	
2वत बंदर टर्मिनस		उत्तरम प.		2A		BARODA TERMINUS		KATLAH JN			
COACH	SEAT/BERTH	SEX	AGE	NAME	LAUTHOR	CONC.	R. FEE	S. CH.	SP. CH.	VOUCHER	CASH
AI	21	LB	N	35			75				2578
AI	23	SL	F	37							
AI	22	UP	R	7							
1-TICKET/ NO CASH REFUNDS											
(NEW TIME TABLE FROM 01-12-2006) SHARDA EXPRESS BOARDING STTS 24-12-2006 713 27-10-2006 14:35 RCT1 210 VIA BRC											

(a) Train Number..... 9037

(b) The fare (the cost of the ticket)..... ₹ 2578 = 00

(c) The date of the start of the journey 24 - 12 - 2006

(d) The distance (in km) 643

(e) PNR No. 820 - 6449755

(b) Locate the following on the given map : (5x1 = 5)

(i) Rajasthan

(ii) Goa

(iii) Pakistan

(iv) Jammu & Kashmir

(v) Nepal

